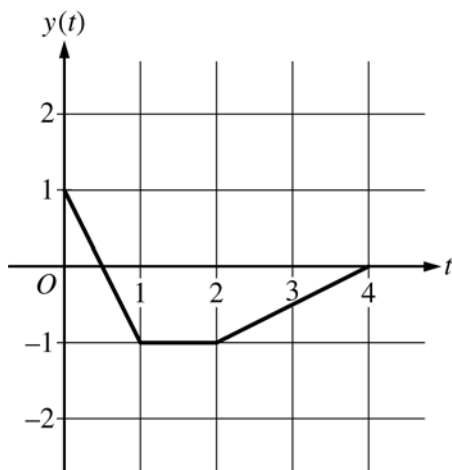


**AP[®] CALCULUS BC
2016 SCORING GUIDELINES**

Question 2



At time t , the position of a particle moving in the xy -plane is given by the parametric functions $(x(t), y(t))$, where $\frac{dx}{dt} = t^2 + \sin(3t^2)$. The graph of y , consisting of three line segments, is shown in the figure above.

At $t = 0$, the particle is at position $(5, 1)$.

- Find the position of the particle at $t = 3$.
- Find the slope of the line tangent to the path of the particle at $t = 3$.
- Find the speed of the particle at $t = 3$.
- Find the total distance traveled by the particle from $t = 0$ to $t = 2$.

(a) $x(3) = x(0) + \int_0^3 x'(t) dt = 5 + 9.377035 = 14.377$

$$y(3) = -\frac{1}{2}$$

The position of the particle at $t = 3$ is $(14.377, -0.5)$.

(b) Slope = $\frac{y'(3)}{x'(3)} = \frac{0.5}{9.956376} = 0.05$

(c) Speed = $\sqrt{(x'(3))^2 + (y'(3))^2} = 9.969$ (or 9.968)

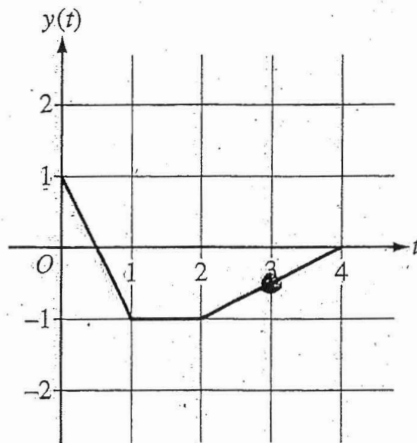
(d) Distance = $\int_0^2 \sqrt{(x'(t))^2 + (y'(t))^2} dt$
 $= \int_0^1 \sqrt{(x'(t))^2 + (-2)^2} dt + \int_1^2 \sqrt{(x'(t))^2 + 0^2} dt$
 $= 2.237871 + 2.112003 = 4.350$ (or 4.349)

3 : { 1 : integral
1 : uses initial condition
1 : answer

1 : slope

2 : { 1 : expression for speed
1 : answer

3 : { 1 : expression for distance
1 : integrals
1 : answer



2. At time t , the position of a particle moving in the xy -plane is given by the parametric functions $(x(t), y(t))$, where $\frac{dx}{dt} = t^2 + \sin(3t^2)$. The graph of y , consisting of three line segments, is shown in the figure above. At $t = 0$, the particle is at position $(5, 1)$.

(a) Find the position of the particle at $t = 3$.

$$t=3 \quad y = -0.5$$

$$t=3 \quad (14.377, -0.5)$$

$$\int_0^3 (t^2 + \sin(3t^2)) dt = x(3) - x(0)$$

$$5 + \int_0^3 (t^2 + \sin(3t^2)) dt = 14.377$$

(b) Find the slope of the line tangent to the path of the particle at $t = 3$.

$$t=3 \rightarrow \frac{dy}{dx} = \frac{\frac{dy}{dt}}{\frac{dx}{dt}} = \frac{y(4) - y(2)}{4 - 2} \cdot \frac{1}{3^2 + \sin(3(3^2))}$$

$$y = -0.5$$

$$x = 14.377$$

$$\frac{dy}{dx} = \frac{0 + 1}{2} = \frac{1}{2} \cdot \frac{1}{9 + \sin 27} = 0.050$$

Do not write beyond this border.

Do not write beyond this border.

(c) Find the speed of the particle at $t = 3$.

$$\text{SPEED} = \sqrt{\left(\frac{dx}{dt}\right)^2 + \left(\frac{dy}{dt}\right)^2}$$

$$\text{SPEED} = \sqrt{(9 + \sin 2t)^2 + \left(\frac{1}{2}\right)^2}$$

$$\text{SPEED @ } t=3 \Rightarrow \boxed{9.969 \text{ w/time}}$$

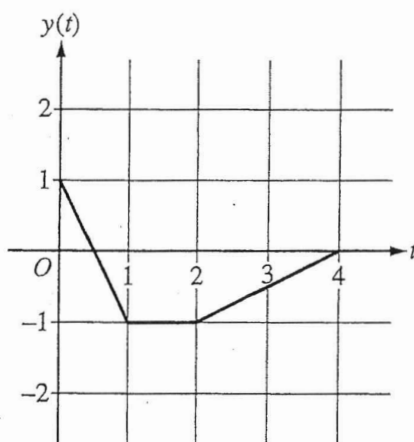
(d) Find the total distance traveled by the particle from $t = 0$ to $t = 2$.

$$\text{TD} = \int_a^b \sqrt{\left(\frac{dx}{dt}\right)^2 + \left(\frac{dy}{dt}\right)^2}$$

$$\text{TD} = \int_0^1 \sqrt{(t^2 + \sin(3t^2))^2 + (-2)^2} + \int_1^2 \sqrt{(t^2 + \sin(3t^2))^2 + (0)^2}$$

$$\text{TD} = \boxed{4.350 \text{ units}}$$

Do not write beyond this border.



2. At time t , the position of a particle moving in the xy -plane is given by the parametric functions $(x(t), y(t))$, where $\frac{dx}{dt} = t^2 + \sin(3t^2)$. The graph of y , consisting of three line segments, is shown in the figure above. At $t = 0$, the particle is at position $(5, 1)$.

(a) Find the position of the particle at $t = 3$.

$$t = 3 \rightarrow y = -0.5 \text{ from graph}$$

$$x = \int_0^3 (t^2 + \sin(3t^2)) dt + 5$$

$$x = 14.377$$

$$(14.377, -0.5)$$

(b) Find the slope of the line tangent to the path of the particle at $t = 3$.

$$\frac{dy}{dx} = \frac{dy}{dt} / \frac{dx}{dt}$$

$$\left. \frac{dy}{dt} \right|_{t=3} = \frac{0 - (-1)}{4 - 2} = \frac{1}{2}$$

$$\left. \frac{dx}{dt} \right|_{t=3} = 3^2 + \sin(3 \cdot 3^2) = 9.956376$$

$$\frac{dy}{dx} = \frac{9.956376}{\frac{1}{2}} = 19.913$$

Do not write beyond this border.

2

2

2

2

2

2

2

2

2

2

2 of 2

2B2

(c) Find the speed of the particle at $t = 3$.

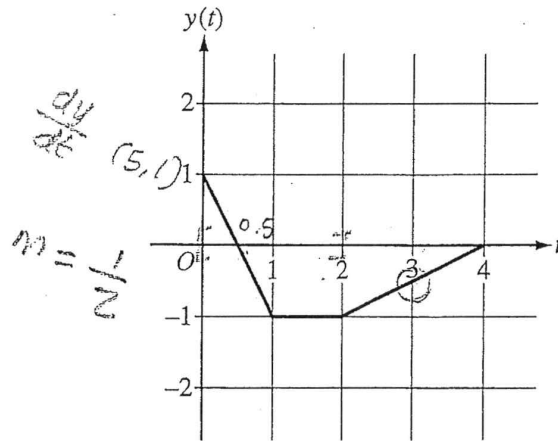
$$\begin{aligned}
 s|_{t=3} &= \sqrt{\left(\frac{dx}{dt}\right)^2 + \left(\frac{dy}{dt}\right)^2} \\
 &= \sqrt{(1.956376)^2 + \left(\frac{1}{2}\right)^2} \\
 &= 4.969
 \end{aligned}$$

(d) Find the total distance traveled by the particle from $t = 0$ to $t = 2$.

$$\begin{aligned}
 d &= \int_0^2 \sqrt{\left(\frac{dx}{dt}\right)^2 + \left(\frac{dy}{dt}\right)^2} dt \\
 d &= \int_0^1 \sqrt{(t + \sin(3t^2))^2 + (-2t + 1)^2} dt + \int_1^2 \sqrt{(t + \sin(3t^2))^2 + (-1)^2} dt \\
 d &= 3.377
 \end{aligned}$$

Do not write beyond this border.

Do not write beyond this border.



2. At time t , the position of a particle moving in the xy -plane is given by the parametric functions $(x(t), y(t))$, where $\frac{dx}{dt} = t^2 + \sin(3t^2)$. The graph of y , consisting of three line segments, is shown in the figure above. At $t = 0$, the particle is at position $(5, 1)$.

(a) Find the position of the particle at $t = 3$.

$$(5, 1) \leftarrow 0$$

$$\frac{dx}{dt} = (3)^2 + \sin(27)$$

$$= 9.956$$

$$x = 5 + 9.956 \quad y = 1 + \frac{1}{2}$$

$$\boxed{(14.956, 1.5)}$$

(b) Find the slope of the line tangent to the path of the particle at $t = 3$.

$$\frac{dx}{dt} = t^2 + \sin(3t^2)$$

$$= 9 + \sin(27)$$

$$\frac{dy}{dt} = \frac{dy}{dx} \cdot \frac{dx}{dt}$$

$$\frac{dy}{dx} = \frac{0.5}{9 + \sin 27} = \boxed{0.050}$$

Do not write beyond this border.

(c) Find the speed of the particle at $t = 3$.

$$\begin{aligned}\text{speed} &= \sqrt{(x'(t))^2 + (y'(t))^2} \\ &= \sqrt{(9 + \sin 27)^2 + (0.5)^2} \\ &= 9.969\end{aligned}$$

(d) Find the total distance traveled by the particle from $t = 0$ to $t = 2$.

$$\begin{aligned}&\int_0^2 (t^2 + \sin(3t^2)) + \int_0^2 y'(t) \\ &2.960 + (0.25 + 0.25 + 1) \\ &2.960 + 1.50 \\ &= \boxed{3.460}\end{aligned}$$

Do not write beyond this border.

AP[®] CALCULUS BC
2016 SCORING COMMENTARY

Question 2

Overview

In this problem students were given information about the motion of a particle in the xy -plane. The position of the particle is defined as $(x(t), y(t))$, where $\frac{dx}{dt} = t^2 + \sin(3t^2)$. The graph of y , consisting of three line segments, and the position of the particle at $t = 0$ were also given. In part (a) students needed to find the position of the particle at $t = 3$. Students were expected to evaluate $5 + \int_0^3 (t^2 + \sin(3t^2)) dt$ using the calculator to find $x(3)$. The value of $y(3)$ can be read from the graph. In part (b) students needed to compute the slope of the line tangent to the particle's path at $t = 3$ by evaluating $\frac{y'(3)}{x'(3)}$. The value for $y'(3)$ is found by computing the slope of the line segment from $t = 2$ to $t = 4$, and the value for $x'(3)$ is found using the calculator. In part (c) students needed to find the speed of the particle at $t = 3$. Students were expected to write the expression for speed, $\sqrt{(x'(3))^2 + (y'(3))^2}$, and use the calculator to compute this value. In part (d) students needed to find the total distance traveled from $t = 0$ to $t = 2$. Although the general formula for total distance traveled is $\int_0^2 \sqrt{(x'(t))^2 + (y'(t))^2} dt$, students were expected to write the total distance traveled as the sum of two integrals since $y'(t) = -2$ from $t = 0$ to $t = 1$, and $y'(t) = 0$ from $t = 1$ to $t = 2$. The expression $\int_0^1 \sqrt{(x'(t))^2 + (-2)^2} dt + \int_1^2 \sqrt{(x'(t))^2 + (0)^2} dt$ is evaluated using the calculator.

Sample: 2A

Score: 9

The response earned all 9 points.

Sample: 2B

Score: 6

The response earned 6 points: 3 points in part (a), no points in part (b), 2 points in part (c), and 1 point in part (d). In part (a) the student's work is correct. In part (b) the student calculates $\frac{dx}{dy}$ instead of $\frac{dy}{dx}$ and did not earn the point. In part (c) the student's work is correct. In part (d) the student presents a single integral for total distance traveled and earned the first point. The student attempts to present the total distance traveled as the sum of two integrals. The $\frac{dy}{dt}$ in each integrand is incorrect. The student did not earn any other points.

Sample: 2C

Score: 3

The response earned 3 points: no points in part (a), 1 point in part (b), 2 points in part (c), and no points in part (d). In part (a) the student evaluates $x'(3)$ instead of $x(3)$. The student was not eligible to earn any points. In parts (b) and (c) the student's work is correct. In part (d) the student does not present a correct integral expression for total distance traveled. The student was not eligible for any points.