

AP[®] STATISTICS
2011 SCORING GUIDELINES (Form B)

Question 6

Intent of Question

The primary goals of this question were to assess students' ability to (1) interpret the slope of a regression line in context; (2) decide whether or not a model should be used for prediction; (3) describe the sampling distribution of a sample mean; (4) use the sampling distribution of a sample mean to obtain an interval of plausible values; (5) compare two different study plans and decide which one would provide a better estimator of the slope; (6) propose a different study plan to check an assumption.

Solution

Part (a):

For each additional foot that is added to the width of the grass buffer strip, an additional 3.6 parts per hundred of nitrogen is removed on average from the runoff water.

Part (b):

No. This is extrapolation beyond the range of data from the experiment. Buffer strips narrower than 5 feet or wider than 15 feet were not investigated.

Part (c):

Because the distribution of nitrogen removed for any particular buffer strip width is normally distributed with a standard deviation of 5 parts per hundred, the sampling distribution of the mean of four observations when the buffer strips are 6 feet wide will be normal with mean $33.8 + 3.6 \times 6 = 55.4$ parts per hundred and a standard deviation of $\frac{\sigma}{\sqrt{n}} = \frac{5}{\sqrt{4}} = 2.5$ parts per hundred.

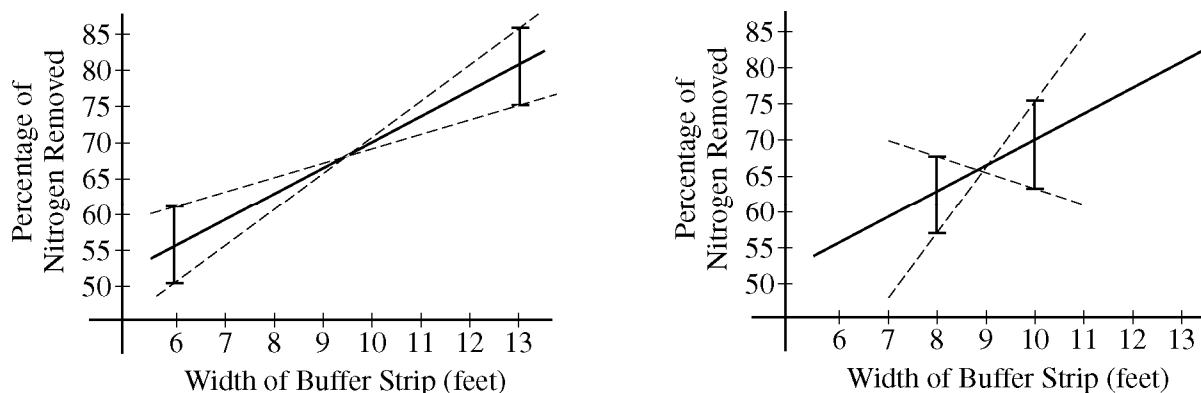
Part (d):

The distribution of the sample mean is normal, so the interval that has probability 0.95 of containing the mean nitrogen content removed from four buffer strips of width 6 feet extends from $55.4 - 1.96 \times 2.5 = 50.5$ parts per hundred to $55.4 + 1.96 \times 2.5 = 60.3$ parts per hundred.

AP[®] STATISTICS
2011 SCORING GUIDELINES (Form B)

Question 6 (continued)

Part (e):



If we think that the sample mean nitrogen removed at a particular buffer width might reasonably be any value in the intervals shown, a sample regression line will result from connecting any point in the interval above 6 to any point in the interval above 13. With this in mind, the dashed lines in the plots above represent extreme cases for possible sample regression lines. From these plots, we can see that there is a wider range of possible slopes in the second plot (on the right) than in the first plot (on the left). Because of this, the variability in the sampling distribution of b , the estimator for the slope of the regression line, will be smaller for the first study plan (with four observations at 6 feet and four observations at 13 feet) than it would be for the second study plan (with four observations at 8 feet and four observations at 10 feet). Therefore, the first study plan (on the left) would provide a better estimator of the slope of the regression line than the second study plan (on the right).

Part (f):

To assess the linear relationship between width of the buffer strip and the amount of nitrogen removed from runoff water, more widths should be used. To detect a nonlinear relationship it would be best to use buffer widths that were spaced out over the entire range of interest. For example, if the range of interest is 6 to 13 feet, eight buffers with widths 6, 7, 8, 9, 10, 11, 12 and 13 feet could be used.

Scoring

This question is scored in four sections. Section 1 consists of parts (a) and (b); section 2 consists of parts (c) and (d); section 3 consists of part (e); section 4 consists of part (f). Each of the four sections is scored as essentially correct (E), partially correct (P), or incorrect (I).

Section 1 is scored as follows:

Essentially correct (E) if the response includes the following two components:

1. The response in part (a) is correct, as evidenced by the correct interpretation of the slope, in context.
2. The response in part (b) is correct, as evidenced by the identification of extrapolation as the reason that the model should not be used *AND* the response is in context.

Partially correct (P) if only one of the two components listed above is correct.

AP[®] STATISTICS
2011 SCORING GUIDELINES (Form B)

Question 6 (continued)

Incorrect (I) if the response fails to meet the criteria for E or P.

Notes

- Part (a) is incorrect if the interpretation is not in context or if the interpretation does not acknowledge uncertainty (for example, does not include “on average” or “about” or “approximately” or “predicted” when referring to the increase in nitrogen removed).
- Ideally a correct solution would also include units and make it clear that it is the approximate increase for each *additional* foot added to the buffer, but in the context of this larger investigative task, failure to do so is not sufficient to make part (a) incorrect.
- Part (b) is incorrect if extrapolation is not identified as the reason or if the response is not in context.

Section 2 is scored as follows:

Essentially correct (E) if the response includes the following two components:

1. The response in part (c) states that the sampling distribution is normal *AND* provides a correct mean and standard deviation.
2. The response in part (d) uses the correct mean and standard deviation of the sampling distribution — or incorrect values carried over from part (c) — *AND* a correct critical value (1.96 or 2) to compute a correct interval.

Partially correct (P) if only one of two components listed above is correct.

Incorrect (I) if the response fails to meet the criteria for E or P.

Notes

- Stating that the sampling distribution is *approximately* normal is acceptable for part (c).
- Part (c) is incorrect if the response does not state that the distribution is normal or if an incorrect mean or standard deviation is given.
- Part (d) is incorrect if an incorrect critical value (for example a *t* critical value) is used or if an incorrect mean or standard deviation — other than incorrect values from part (c) — is used in the computation of the interval.

Section 3 is scored as follows:

Essentially correct (E) if study plan 1 is chosen in part (e), and the response demonstrates awareness of sampling variation in the estimates of the slopes of the regression lines, *AND* this is clearly communicated in the context of the two study plans.

Partially correct (P) if study plan 1 is chosen in part (e), and the response demonstrates awareness of sampling variation in the estimates of the slopes of the regression lines, *BUT* the justification of the choice of study plan 1 is not clearly communicated.

Incorrect (I) if the response fails to meet the criteria for E or P.

AP[®] STATISTICS
2011 SCORING GUIDELINES (Form B)

Question 6 (continued)

Section 4 is scored as follows:

Essentially correct (E) if the response specifies another study plan that uses eight buffer strips of at least three different *specified* widths, and the response indicates in how many locations each width will be used, *OR* the response makes it clear that at least three different buffer widths will be used and indicates that the buffer widths to be used will be spread out over the range of interest.

Note: Specifying eight different widths is sufficient for an E in section 4.

Partially correct (P) if the response does not meet criteria for E, *BUT* the stated plan uses at least three different widths. Widths need not be specified for a P.

Incorrect (I) if the plan does not use at least three different widths.

Each essentially correct (E) section counts as 1 point. Each partially correct (P) section counts as ½ point.

- | | |
|----------|-----------------------------|
| 4 | Complete Response |
| 3 | Substantial Response |
| 2 | Developing Response |
| 1 | Minimal Response |

If a response is between two scores (for example, 2½ points), use a holistic approach to decide whether to score up or down, depending on the overall strength of the response and communication.

6A1

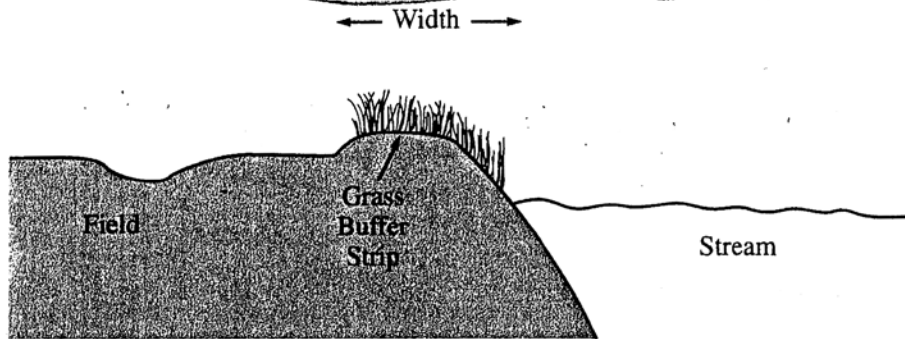
6A1

STATISTICS
SECTION II
Part B
Question 6

Spend about 25 minutes on this part of the exam.
Percent of Section II score—25

Directions: Show all your work. Indicate clearly the methods you use, because you will be scored on the correctness of your methods as well as on the accuracy and completeness of your results and explanations.

6. Grass buffer strips are grassy areas that are planted between bodies of water and agricultural fields. These strips are designed to filter out sediment, organic material, nutrients, and chemicals carried in runoff water. The figure below shows a cross-sectional view of a grass buffer strip that has been planted along the side of a stream.



A study in Nebraska investigated the use of buffer strips of several widths between 5 feet and 15 feet. The study results indicated a linear relationship between the width of the grass strip (x), in feet, and the amount of nitrogen removed from the runoff water (y), in parts per hundred. The following model was estimated.

$$\hat{y} = 33.8 + 3.6x$$

- (a) Interpret the slope of the regression line in the context of this question.

The slope, 3.6, means that the increase in the y (width of grass strip) would lead to

3.6 increase in expected value of y (the amount of N removed from runoff water)

- (b) Would you be willing to use this model to predict the amount of nitrogen removed for grass buffer strips with widths between 0 feet and 30 feet? Explain why or why not.

No, the study was conducted for x values between 5 feet and 15 feet.

Using this model to predict width outside this range, such as 30 feet, can result

in unreliable data. \hat{y} at $x=30$ is 141.8

Therefore, I would not use this model to predict y values at x between 0 and 30 feet.

GO ON TO THE NEXT PAGE.

A scientist in California wants to know if there is a similar relationship in her area. To investigate this, she will place a grass buffer strip between a field and a nearby stream at each of eight different locations and measure the amount of nitrogen that the grass buffer strip removes, in parts per hundred, from runoff water at each location. Each of the eight locations can accommodate a buffer strip between 6 feet and 13 feet in width. The scientist wants to investigate which combination of widths will provide the best estimate of the slope of the regression line.

Suppose the scientist decides to use buffer strips of width 6 feet at each of four locations and buffer strips of width 13 feet at each of the other four locations. Assume the model, $\hat{y} = 33.8 + 3.6x$, estimated from the Nebraska study is the true regression line in California and the observations at the different locations are normally distributed with standard deviation of 5 parts per hundred.

- (c) Describe the sampling distribution of the sample mean of the observations on the amount of nitrogen removed by the four buffer strips with widths of 6 feet.

the sampling distribution would have the mean of 55.4 ($= 33.8 + 3.6 \times 6$) parts per hundred.

As the passage suggests that the observations at different locations are normally distributed with the standard deviation of 5 parts per hundred this sampling distribution will follow $N(55.4, \frac{5}{\sqrt{4}})$

- (d) Using your result from part (c), show how to construct an interval that has probability 0.95 of containing the sample mean of the observations from four buffer strips with widths of 6 feet.

$$C.I. : \bar{x} \pm z^* \times \frac{\sigma}{\sqrt{n}}$$

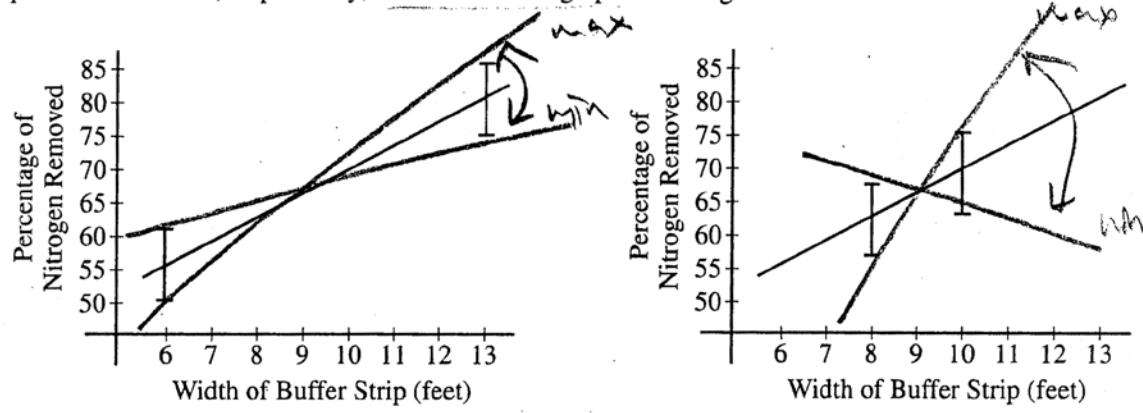
→ Here, the 95% C.I. would be

$$55.4 \pm 1.96 \times \frac{5}{\sqrt{4}}$$

$$= (50.5, 60.3)$$

GO ON TO THE NEXT PAGE.

For the study plan being implemented by the scientist in California, the graph on the left below displays intervals that each have probability 0.95 of containing the sample mean of the four observations for buffer strips of width 6 feet and for buffer strips of width 13 feet. A second possible study plan would use buffer strips of width 8 feet at four of the eight locations and buffer strips of width 10 feet at the other four locations. Intervals that each have probability 0.95 of containing the mean of the four observations for buffer strips of width 8 feet and for buffer strips of width 10 feet, respectively, are shown in the graph on the right below.



If data are collected for the first study plan, a sample mean will be computed for the four observations from buffer strips of width 6 feet and a second sample mean will be computed for the four observations from buffer strips of width 13 feet. The estimated regression line for those eight observations will pass through the two sample means. If data are collected for the second study plan, a similar method will be used.

(e) Use the plots above to determine which study plan, the first or the second, would provide a better estimator of the slope of the regression line. Explain your reasoning.

Fig. 6.1(e).1
 the first would provide better estimator of the slope of the regression line.
 the regression line always pass through the two sample means. In the first plan, the variability of the slope would be less than in the second plan as illustrated in Fig. 6.1(e).1, 2. therefore the first plan gives a more reliable regression line.

The previous parts of this question used the assumption of a straight-line relationship between the width of the buffer strip and the amount of nitrogen that is removed, in parts per hundred. Although this assumption was motivated by prior experience, it may not be correct. Describe another way of choosing the widths of the buffer strips at eight locations that would enable the researchers to check the assumption of a straight-line relationship.

Choose width of the buffer strips at eight locations as 6, 7, 8, 9, 10, 11, 12, 13. By analyzing y values, drawing a scatterplot of x & y would be possible, then researchers can find the regression line.

GO ON TO THE NEXT PAGE.

STATISTICS

SECTION II

Part B

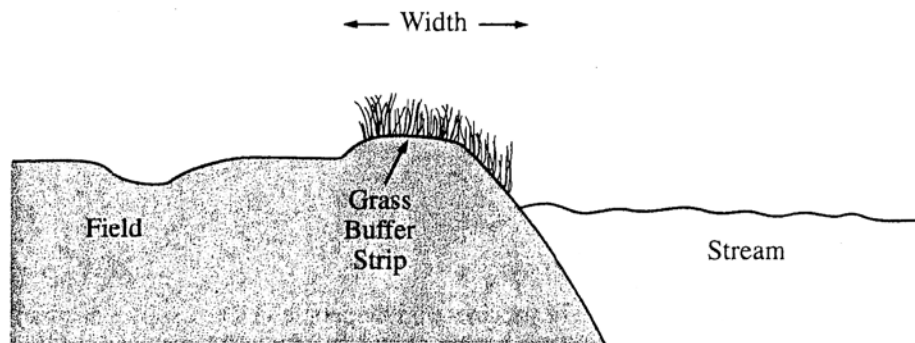
Question 6

Spend about 25 minutes on this part of the exam.

Percent of Section II score—25

Directions: Show all your work. Indicate clearly the methods you use, because you will be scored on the correctness of your methods as well as on the accuracy and completeness of your results and explanations.

6. Grass buffer strips are grassy areas that are planted between bodies of water and agricultural fields. These strips are designed to filter out sediment, organic material, nutrients, and chemicals carried in runoff water. The figure below shows a cross-sectional view of a grass buffer strip that has been planted along the side of a stream.



A study in Nebraska investigated the use of buffer strips of several widths between 5 feet and 15 feet. The study results indicated a linear relationship between the width of the grass strip (x), in feet, and the amount of nitrogen removed from the runoff water (y), in parts per hundred. The following model was estimated.

$$\hat{y} = 33.8 + 3.6x$$

- (a) Interpret the slope of the regression line in the context of this question.

The slope of regression is 3.6. It means that, on average, amount of nitrogen removed from the runoff water is increased by 3.6 (in parts per hundred) with every additional feet of grass strip.

- (b) Would you be willing to use this model to predict the amount of nitrogen removed for grass buffer strips with widths between 0 feet and 30 feet? Explain why or why not.

We would not be willing to predict the amount of nitrogen removed with widths of buffer strips between 0 and 30 feet, as our linear model works in range 5 feet to 15 feet, i.e. we should not extrapolate.

GO ON TO THE NEXT PAGE.

6B2

6B2

A scientist in California wants to know if there is a similar relationship in her area. To investigate this, she will place a grass buffer strip between a field and a nearby stream at each of eight different locations and measure the amount of nitrogen that the grass buffer strip removes, in parts per hundred, from runoff water at each location. Each of the eight locations can accommodate a buffer strip between 6 feet and 13 feet in width. The scientist wants to investigate which combination of widths will provide the best estimate of the slope of the regression line.

Suppose the scientist decides to use buffer strips of width 6 feet at each of four locations and buffer strips of width 13 feet at each of the other four locations. Assume the model, $\hat{y} = 33.8 + 3.6x$, estimated from the Nebraska study is the true regression line in California and the observations at the different locations are normally distributed with standard deviation of 5 parts per hundred.

- (c) Describe the sampling distribution of the sample mean of the observations on the amount of nitrogen removed by the four buffer strips with widths of 6 feet.

$\hat{y} = 33.8 + 3.6x$ - true regression line \Rightarrow
 \Rightarrow when widths are 6 feet $\mu = 33.8 + 3.6 \cdot 6 = 55.4$ parts per hundred
 \uparrow
 real μ when $x = 6$ feet
 So distribution is normal with $\mu = 55.4$; $\sigma = 5$

- (d) Using your result from part (c), show how to construct an interval that has probability 0.95 of containing the sample mean of the observations from four buffer strips with widths of 6 feet.

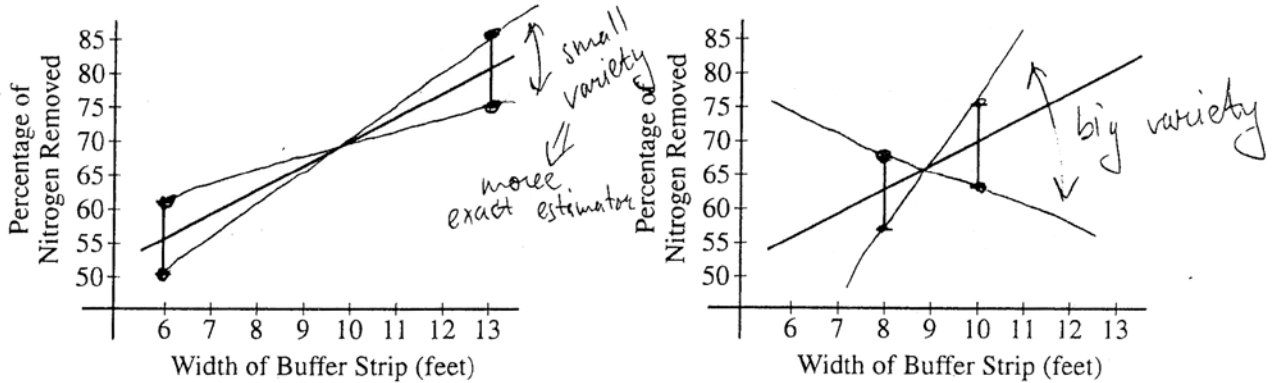
So, we should construct 95% confidence interval for μ using $\bar{x} = \frac{x_1 + x_2 + x_3 + x_4}{4}$, with widths of 6 feet.

Confidence interval: ~~$\mu = \bar{x} \pm 1.96 \cdot \frac{5}{\sqrt{4}} = 42.1$~~

$$\mu = \bar{x} \pm Z_{0.95} \cdot \frac{5}{\sqrt{4}} \Rightarrow \mu = \bar{x} \pm 1.96 \cdot \frac{5}{2} \Rightarrow \mu = \bar{x} \pm 4.9$$

GO ON TO THE NEXT PAGE.

For the study plan being implemented by the scientist in California, the graph on the left below displays intervals that each have probability 0.95 of containing the sample mean of the four observations for buffer strips of width 6 feet and for buffer strips of width 13 feet. A second possible study plan would use buffer strips of width 8 feet at four of the eight locations and buffer strips of width 10 feet at the other four locations. Intervals that each have probability 0.95 of containing the mean of the four observations for buffer strips of width 8 feet and for buffer strips of width 10 feet, respectively, are shown in the graph on the right below.



If data are collected for the first study plan, a sample mean will be computed for the four observations from buffer strips of width 6 feet and a second sample mean will be computed for the four observations from buffer strips of width 13 feet. The estimated regression line for those eight observations will pass through the two sample means. If data are collected for the second study plan, a similar method will be used.

- (e) Use the plots above to determine which study plan, the first or the second, would provide a better estimator of the slope of the regression line. Explain your reasoning.

First graph will provide a better estimator for the slope as we can see from the graph above, the variety of lines on the first graph is much less.

- (f) The previous parts of this question used the assumption of a straight-line relationship between the width of the buffer strip and the amount of nitrogen that is removed, in parts per hundred. Although this assumption was motivated by prior experience, it may not be correct. Describe another way of choosing the widths of the buffer strips at eight locations that would enable the researchers to check the assumption of a straight-line relationship.

We should take 8 different widths: 6, 7, ..., 13 and we get 8 points. This ~~test~~ method is much better as it give ~~test~~ us residuals list from which we can make a conclusion whether linear model is appropriate or not.

GO ON TO THE NEXT PAGE.

STATISTICS

SECTION II

Part B

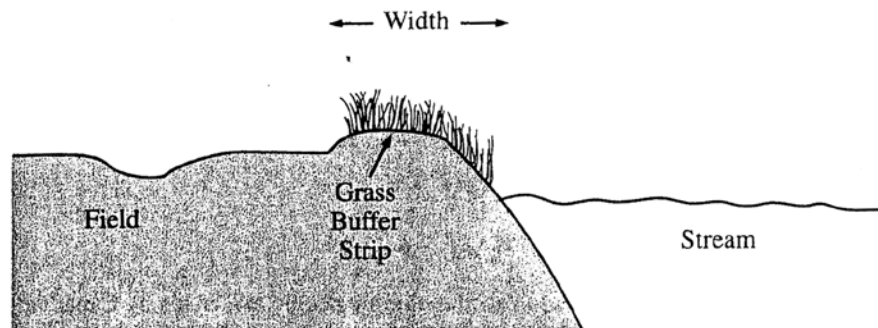
Question 6

Spend about 25 minutes on this part of the exam.

Percent of Section II score—25

Directions: Show all your work. Indicate clearly the methods you use, because you will be scored on the correctness of your methods as well as on the accuracy and completeness of your results and explanations.

6. Grass buffer strips are grassy areas that are planted between bodies of water and agricultural fields. These strips are designed to filter out sediment, organic material, nutrients, and chemicals carried in runoff water. The figure below shows a cross-sectional view of a grass buffer strip that has been planted along the side of a stream.



A study in Nebraska investigated the use of buffer strips of several widths between 5 feet and 15 feet. The study results indicated a linear relationship between the width of the grass strip (x), in feet, and the amount of nitrogen removed from the runoff water (y), in parts per hundred. The following model was estimated.

$$\hat{y} = 33.8 + 3.6x$$

- (a) Interpret the slope of the regression line in the context of this question.

The slope is 3.6. As one feet of the width of the grass strip increases, 3.6 ^{parts per hundred} of amount of nitrogen is removed from the runoff water.

- (b) Would you be willing to use this model to predict the amount of nitrogen removed for grass buffer strips with widths between 0 feet and 30 feet? Explain why or why not.

No. This model was estimated for buffer strips of 5ft. to 15ft. We do not have confidence that this model will apply to widths between 0ft to 30ft.

GO ON TO THE NEXT PAGE.

6C2

6C2

A scientist in California wants to know if there is a similar relationship in her area. To investigate this, she will place a grass buffer strip between a field and a nearby stream at each of eight different locations and measure the amount of nitrogen that the grass buffer strip removes, in parts per hundred, from runoff water at each location. Each of the eight locations can accommodate a buffer strip between 6 feet and 13 feet in width. The scientist wants to investigate which combination of widths will provide the best estimate of the slope of the regression line.

Suppose the scientist decides to use buffer strips of width 6 feet at each of four locations and buffer strips of width 13 feet at each of the other four locations. Assume the model, $\hat{y} = 33.8 + 3.6x$, estimated from the Nebraska study is the true regression line in California and the observations at the different locations are normally distributed with standard deviation of 5 parts per hundred.

- (c) Describe the sampling distribution of the sample mean of the observations on the amount of nitrogen removed by the four buffer strips with widths of 6 feet.

$$\hat{y} = 33.8 + 3.6 \times 6 = 55.4$$

The distribution of the sample mean should have a mean of 55.4 and a standard deviation of 5 (parts per hundred.)



- (d) Using your result from part (c), show how to construct an interval that has probability 0.95 of containing the sample mean of the observations from four buffer strips with widths of 6 feet.

C level = 95% \leftarrow The observation should be an SRS, and it is normally distributed.

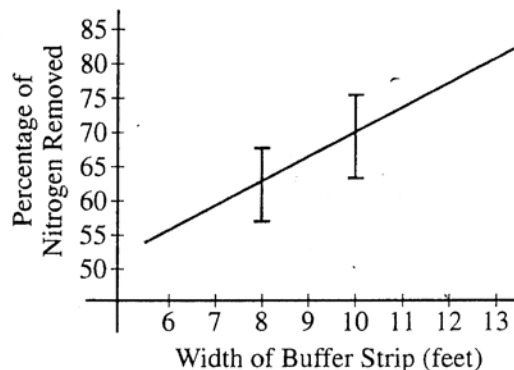
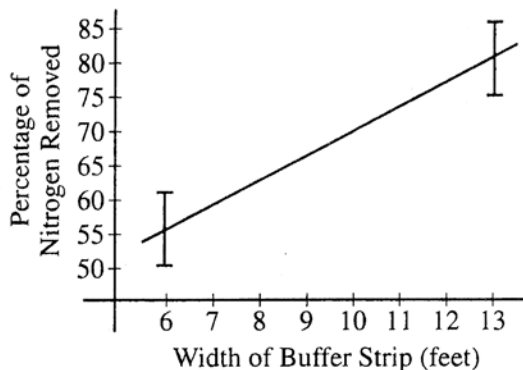
Interval \rightarrow mean \pm Z \cdot SE

$$= 55.4 \pm 1.96 \times \frac{5}{\sqrt{4}} \rightarrow [50.5, 60.3]$$

We are 95% confident that the true mean exists between this confidence interval.

GO ON TO THE NEXT PAGE.


For the study plan being implemented by the scientist in California, the graph on the left below displays intervals that each have probability 0.95 of containing the sample mean of the four observations for buffer strips of width 6 feet and for buffer strips of width 13 feet. A second possible study plan would use buffer strips of width 8 feet at four of the eight locations and buffer strips of width 10 feet at the other four locations. Intervals that each have probability 0.95 of containing the mean of the four observations for buffer strips of width 8 feet and for buffer strips of width 10 feet, respectively, are shown in the graph on the right below.



If data are collected for the first study plan, a sample mean will be computed for the four observations from buffer strips of width 6 feet and a second sample mean will be computed for the four observations from buffer strips of width 13 feet. The estimated regression line for those eight observations will pass through the two sample means. If data are collected for the second study plan, a similar method will be used.

- (e) Use the plots above to determine which study plan, the first or the second, would provide a better estimator of the slope of the regression line. Explain your reasoning.

The first one. Since it has a width from 6 to 13, the variability of the regression line's slope is smaller than the second one.



- (f) The previous parts of this question used the assumption of a straight-line relationship between the width of the buffer strip and the amount of nitrogen that is removed, in parts per hundred. Although this assumption was motivated by prior experience, it may not be correct. Describe another way of choosing the widths of the buffer strips at eight locations that would enable the researchers to check the assumption of a straight-line relationship.

Use random digit table and read three digits each.
 The hundredths will control the place, while the tenths and ones' digit will control the buffer strip's length.
 Use the selected digits only if the hundredth digit is between 1 and 8, and if the tens and ones digit is between a certain length.

GO ON TO THE NEXT PAGE.

AP[®] STATISTICS
2011 SCORING COMMENTARY (Form B)

Question 6

Sample: 6A

Score: 4

The response in part (a) includes the phrase “expected value of y ,” representing an acknowledgment of the uncertainty in the interpretation of the regression model. The answer to part (a) is correct. In part (b) the response states that using the model to predict outside the range of 5 feet to 15 feet can result in “unreliable data.” This captures the essence of extrapolation, so part (b) is answered correctly. Thus section 1, consisting of parts (a) and (b), was scored as essentially correct. The response in part (c) is correct because it includes the normality of the sampling distribution along with the correct mean, 55.4, and the correct standard deviation, $\frac{5}{\sqrt{4}}$. Part (d) is answered correctly because the correct interval is shown. The interval is not a true confidence interval, and the phrase “95% C.I.” was considered extraneous. Therefore section 2, consisting of parts (c) and (d), was scored as essentially correct. Through indications on the plots and a written solution, the student communicates understanding of variability in the estimated slopes of the regression lines and describes how the variability in the estimated slopes would be less in the first study plan (on the left) than in the second study plan (on the right). Section 3, consisting of part (e), was thereby scored as essentially correct. In part (f) the response specifies that eight different widths will be used. This implies that one width will be assigned to each of the eight locations, so section 4, consisting of part (f), was scored as essentially correct. Because the four sections of the solution were all scored as essentially correct, the response earned a score of 4.

Sample: 6B

Score: 3

The response in part (a) clearly indicates that the increase in the amount of nitrogen removed is on average 3.6 parts per hundred for “every additional feet [*sic*] of grass strip.” This is a correct response. The response in part (b) warns that “we should not exstrapolate [*sic*]” and implies that the model may be different over the range 0 feet to 30 feet than it is over 5 feet to 15 feet. This is a correct response. Section 1, consisting of parts (a) and (b), was therefore scored as essentially correct. In part (c) the student provides the correct mean, 55.4, and correctly identifies the distribution as normal, but provides an incorrect standard deviation of 5. Part (c) was scored as incorrect. No final interval is provided in the solution to part (d), which was also scored as incorrect. So section 2, consisting of parts (c) and (d), was scored as incorrect. The response includes potential regression lines on the plots in part (e), with labeling that clearly indicates the plot on the left (corresponding to the first study plan) represents “small variety” in the slope, whereas the plot on the right (the second study plan) exhibits “big variety.” The written part of the solution includes the phrase “the variety of lines on the first graph is much less,” communicating an understanding of the variability of estimated slopes in the two study plans. Section 3, consisting of part (e), was thus scored as essentially correct. The response in part (f) states that “[w]e should take 8 different widths” at values 6 through 13 feet. The “8 points” in the response are the eight available locations. The solution specifies at least three distinct widths for buffer strips and indicates how many locations would be assigned to each width, so section 4, consisting of part (f), was scored as essentially correct. Because three sections were scored as essentially correct and one section was scored as incorrect, the response earned a score of 3.

AP[®] STATISTICS
2011 SCORING COMMENTARY (Form B)

Question 6 (continued)

Sample: 6C

Score: 2

The interpretation of the slope in part (a) does not convey a sense of the uncertainty in the regression model. The response would be correct if a phrase such as *on average*, *expected*, or *predicted* had been associated with the interpretation of 3.6 parts per hundred of nitrogen removed for each additional increase of one foot in the width of the grass strip. Although the word *extrapolation* does not appear in the student's response to part (b), the sentence "We do not have confidence that this model will apply to widths between 0ft to 30ft" captures the essence of extrapolation. The response to part (a) is incorrect, and the response to part (b) is correct, so section 1, consisting of parts (a) and (b), was scored as partially correct. The description of the sampling distribution of the sample mean in part (c) includes the correct mean, 55.4, but an incorrect standard deviation of 5. In addition, the response does not explicitly state that the sampling distribution follows a normal curve, so the answer to part (c) is incorrect. The correct probability interval appears in part (d), which makes the response to that part correct. The statement that begins "we are 95% confident ..." was considered extraneous, as this is an interval for sample means and not the population mean. Section 2, consisting of parts (c) and (d), was therefore scored as partially correct. The response in part (e) includes explicit mention of "the variability of the regression line's slope" and, in the accompanying diagrams, illustrates that the potential variability in the slope is smaller for study plan 1 (on the left). The correct choice of "[t]he first one" (study plan 1), with the accompanying explanation, resulted in section 3, consisting of part (e), being scored as essentially correct. The solution for part (f) is based on the selection of random digits, but it does not ensure that at least three distinct widths would be selected. For this reason section 4, consisting of part (f), was scored as incorrect. Because one section was scored as essentially correct, two sections were scored as partially correct, and one section was scored as incorrect, the response earned a score of 2.